


# PAPIR 1.


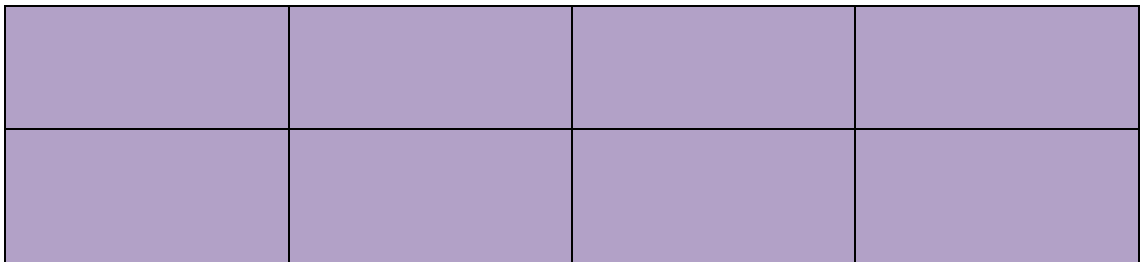
1. Calculate:

a)  $\frac{1}{5} + \frac{2}{5}$    b)  $\frac{2}{5} + \frac{2}{5}$    c)  $\frac{4}{5} + \frac{1}{5}$    d)  $\frac{4}{5} - \frac{1}{5}$    e)  $\frac{4}{5} - \frac{2}{5}$    f)  $\frac{3}{5} - \frac{3}{5}$ .



2. Calculate:

a)  $\frac{1}{8} + \frac{3}{8}$    b)  $\frac{2}{8} + \frac{3}{8}$    c)  $\frac{4}{8} + \frac{1}{8}$    d)  $\frac{4}{8} - \frac{1}{8}$    e)  $\frac{7}{8} - \frac{5}{8}$    f)  $\frac{5}{8} - \frac{2}{8}$ .



## PAPIR 2.

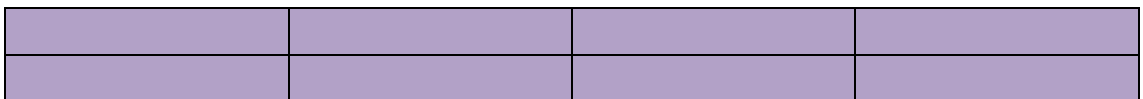
3. Calculate:

a)  $\frac{1}{2} + \frac{1}{4}$  b)  $\frac{1}{2} - \frac{1}{4}$ .



4. Calculate:

b)  $\frac{1}{8} + \frac{1}{4}$  b)  $\frac{3}{8} + \frac{1}{4}$  c)  $\frac{1}{8} + \frac{3}{4}$  d)  $\frac{3}{4} - \frac{3}{8}$  e)  $\frac{1}{4} - \frac{1}{8}$  f)  $\frac{7}{8} - \frac{3}{4}$ .



### PAPIR 3.

5. Calculate

a)  $\frac{3}{4} + \frac{1}{5}$    b)  $\frac{2}{5} + \frac{1}{4}$    c)  $\frac{1}{10} + \frac{17}{20}$    d)  $\frac{3}{10} + \frac{3}{4}$    e)  $\frac{7}{20} + \frac{3}{5}$

f)  $\frac{3}{4} - \frac{7}{10}$    g)  $\frac{19}{20} - \frac{4}{5}$    h)  $\frac{9}{10} - \frac{13}{20}$    i)  $\frac{3}{5} - \frac{1}{4}$    j)  $\frac{1}{2} - \frac{1}{20}$ .

|  |
|--|
|  |
|  |

|  |
|--|
|  |
|  |
|  |
|  |

|  |  |  |  |  |
|--|--|--|--|--|
|  |  |  |  |  |
|--|--|--|--|--|

|  |  |  |  |  |
|--|--|--|--|--|
|  |  |  |  |  |
|  |  |  |  |  |

|  |  |  |  |  |
|--|--|--|--|--|
|  |  |  |  |  |
|  |  |  |  |  |
|  |  |  |  |  |
|  |  |  |  |  |

|  |  |  |  |  |
|--|--|--|--|--|
|  |  |  |  |  |
|  |  |  |  |  |
|  |  |  |  |  |
|  |  |  |  |  |

